

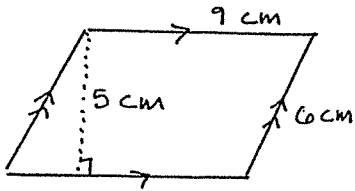
Area & Perimeter #1

Name _____

Find the Area and Perimeter of each of the following figures.

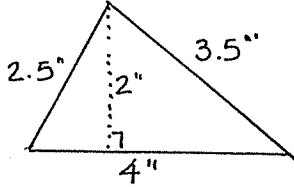
show all of your work and be sure to use the correct labels.

①



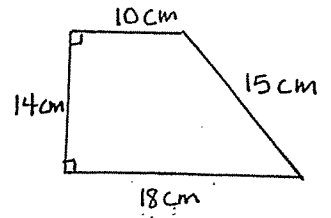
Area _____

Perimeter _____



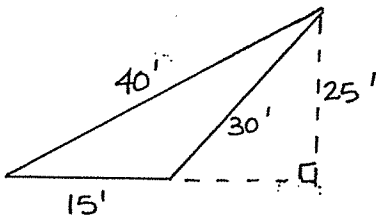
Area _____

Perimeter _____



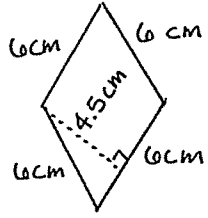
Area _____

Perimeter _____



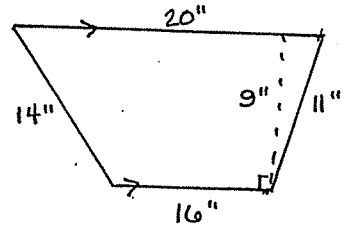
Area _____

Perimeter _____



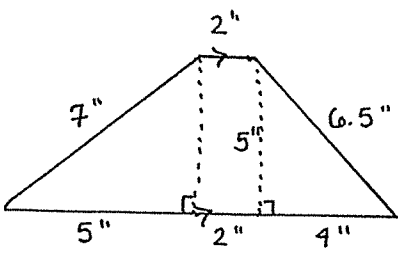
Area _____

Perimeter _____



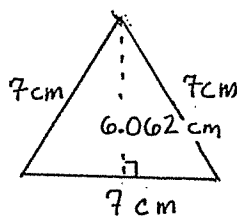
Area _____

Perimeter _____



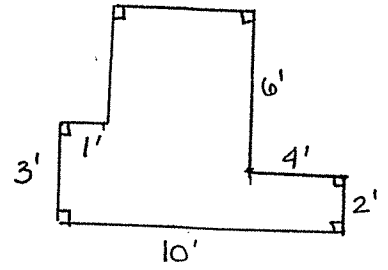
Area _____

Perimeter _____



Area _____

Perimeter _____



Area _____

Perimeter _____