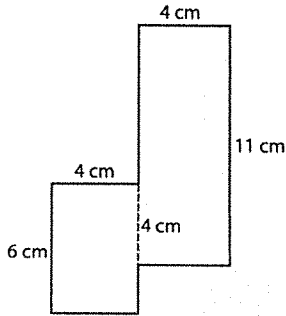


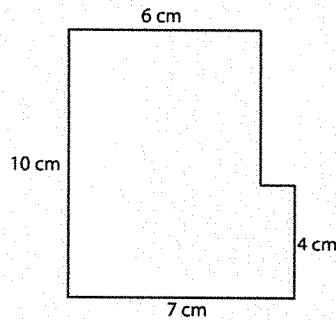
Perimeter and Area of Compound Shapes #1

Name: _____ Class: _____

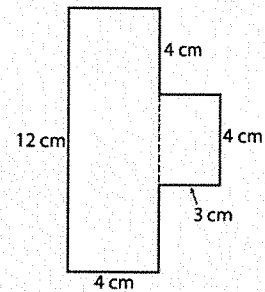
Find the perimeter and area of the following compound shapes (not drawn to scale). All shapes are made up of rectangles and squares.



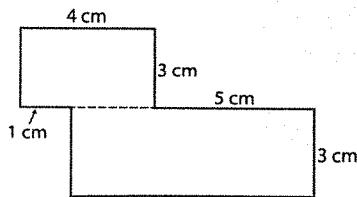
Perimeter: _____
Area: _____



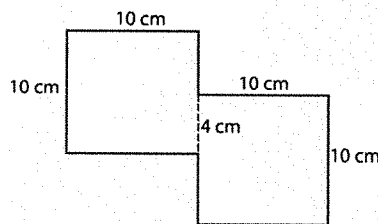
Perimeter: _____
Area: _____



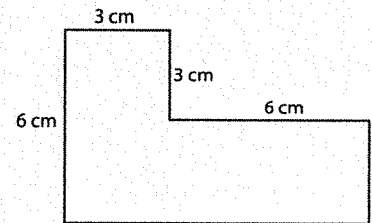
Perimeter: _____
Area: _____



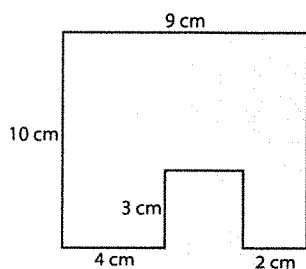
Perimeter: _____
Area: _____



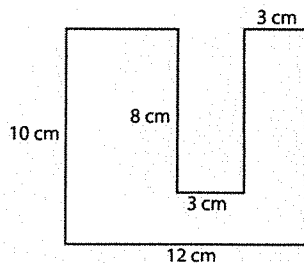
Perimeter: _____
Area: _____



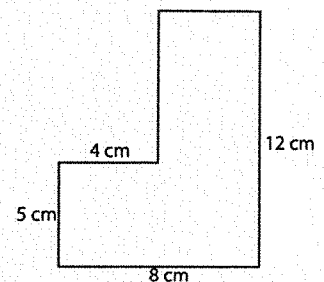
Perimeter: _____
Area: _____



Perimeter: _____
Area: _____



Perimeter: _____
Area: _____



Perimeter: _____
Area: _____

Name: _____

Date: _____

①	$\begin{array}{r} \text{A} \\ 4 \\ \times 13 \\ \hline \end{array}$	$\begin{array}{r} \text{B} \\ 2 \\ \times 14 \\ \hline \end{array}$	$\begin{array}{r} \text{C} \\ 8 \\ \times 9 \\ \hline \end{array}$	$\begin{array}{r} \text{D} \\ 14 \\ \times 5 \\ \hline \end{array}$	$\begin{array}{r} \text{E} \\ 12 \\ \times 15 \\ \hline \end{array}$	$\begin{array}{r} \text{F} \\ 15 \\ \times 7 \\ \hline \end{array}$	$\begin{array}{r} \text{G} \\ 11 \\ \times 15 \\ \hline \end{array}$
---	---	---	--	---	--	---	--

②	$\begin{array}{r} 14 \\ \times 3 \\ \hline \end{array}$	$\begin{array}{r} 14 \\ \times 12 \\ \hline \end{array}$	$\begin{array}{r} 3 \\ \times 12 \\ \hline \end{array}$	$\begin{array}{r} 11 \\ \times 2 \\ \hline \end{array}$	$\begin{array}{r} 12 \\ \times 3 \\ \hline \end{array}$	$\begin{array}{r} 5 \\ \times 9 \\ \hline \end{array}$	$\begin{array}{r} 5 \\ \times 15 \\ \hline \end{array}$
---	---	--	---	---	---	--	---

③	$\begin{array}{r} 13 \\ \times 2 \\ \hline \end{array}$	$\begin{array}{r} 8 \\ \times 11 \\ \hline \end{array}$	$\begin{array}{r} 13 \\ \times 15 \\ \hline \end{array}$	$\begin{array}{r} 8 \\ \times 14 \\ \hline \end{array}$	$\begin{array}{r} 10 \\ \times 3 \\ \hline \end{array}$	$\begin{array}{r} 3 \\ \times 10 \\ \hline \end{array}$	$\begin{array}{r} 12 \\ \times 6 \\ \hline \end{array}$
---	---	---	--	---	---	---	---

④	$\begin{array}{r} 2 \\ \times 11 \\ \hline \end{array}$	$\begin{array}{r} 15 \\ \times 13 \\ \hline \end{array}$	$\begin{array}{r} 4 \\ \times 9 \\ \hline \end{array}$	$\begin{array}{r} 7 \\ \times 3 \\ \hline \end{array}$	$\begin{array}{r} 5 \\ \times 13 \\ \hline \end{array}$	$\begin{array}{r} 3 \\ \times 5 \\ \hline \end{array}$	$\begin{array}{r} 6 \\ \times 4 \\ \hline \end{array}$
---	---	--	--	--	---	--	--

⑤	$5 \times 9 =$	$15 \times 3 =$	$3 \times 2 =$	$10 \times 13 =$
---	----------------	-----------------	----------------	------------------

⑥	$5 \times 12 =$	$10 \times 9 =$	$9 \times 15 =$	$8 \times 14 =$
---	-----------------	-----------------	-----------------	-----------------

⑦	$10 \times 14 =$	$8 \times 3 =$	$11 \times 5 =$	$13 \times 9 =$
---	------------------	----------------	-----------------	-----------------

⑧	$9 \times 11 =$	$15 \times 7 =$	$6 \times 14 =$	$7 \times 2 =$
---	-----------------	-----------------	-----------------	----------------

⑨	$2 \times 8 =$	$11 \times 7 =$	$9 \times 7 =$	$2 \times 14 =$
---	----------------	-----------------	----------------	-----------------

⑩	$5 \times 3 =$	$10 \times 8 =$	$14 \times 11 =$	$14 \times 6 =$
---	----------------	-----------------	------------------	-----------------

⑪	$12 \times 9 =$	$14 \times 13 =$	$3 \times 15 =$	$13 \times 5 =$
---	-----------------	------------------	-----------------	-----------------

⑫	$10 \times 12 =$	$7 \times 5 =$	$2 \times 10 =$	$10 \times 13 =$
---	------------------	----------------	-----------------	------------------