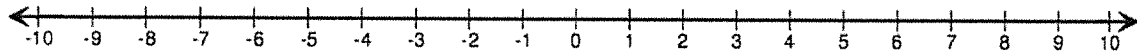


Inequalities Classwork

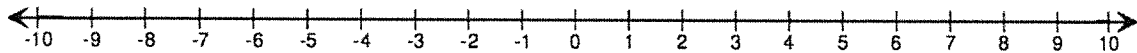
Name: _____

Graph the following inequalities on the number lines:

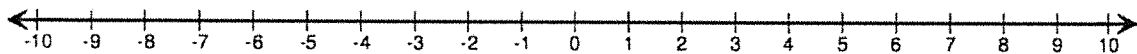
1. $x > 7$



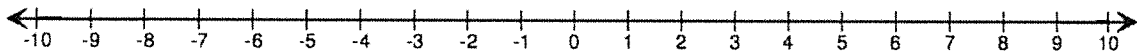
2. $x \leq -6$



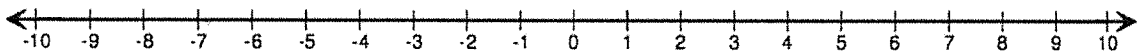
3. $x \geq -3$



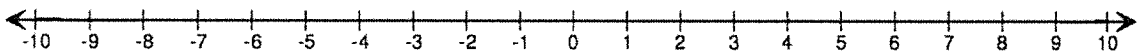
4. $x < 2$



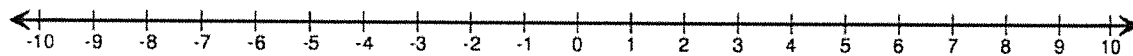
5. $2 > x$



6. $-3 \leq x$



7. $1 < x < 7$



8. $-9 \leq x \leq 9$

